
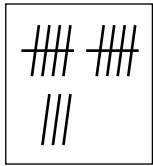


7

Was gehört zusammen? Male in der gleichen Farbe aus.




zwölf

13

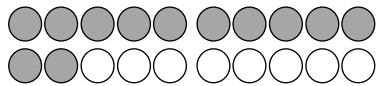
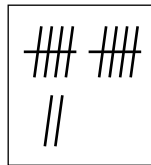
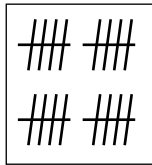
20

17




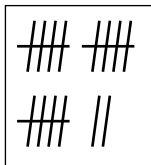
dreizehn

zwanzig




12

siebzehn



15

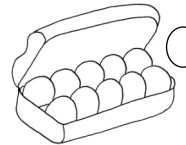
16



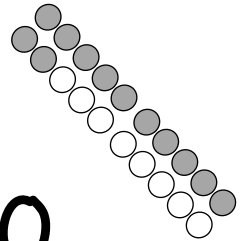
dreizehn

14

11



Die großen
Zahlen bis 20



12

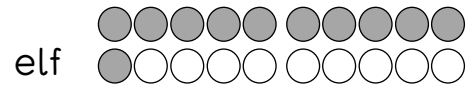
17

19

20


13

18

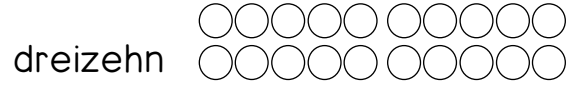


Z	E
1	1

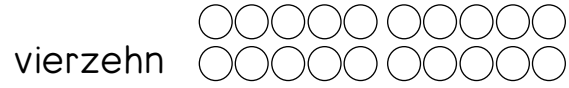
1 1



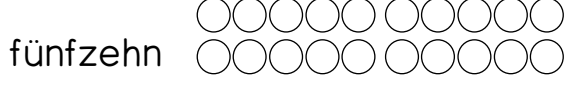
Z	E



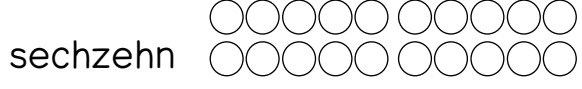
Z	E



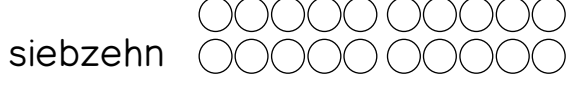
Z	E




Z	E




Z	E




Z	E



Z	E



Z	E



Z	E

Large vertical box with a central illustration of a rock containing several triangles.

zwölf


Z	E

Z	E
1	5

Z	E

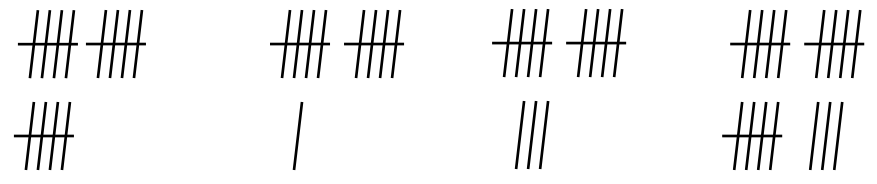
siebzehn

Z	E

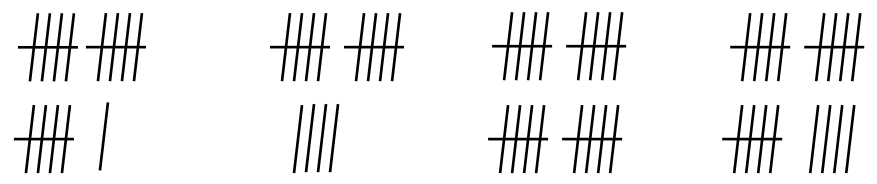
_____ 

Z	E


5




-- -- -- --



-- -- -- --

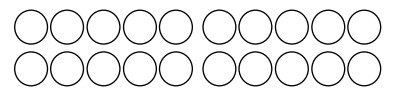


-- -- --

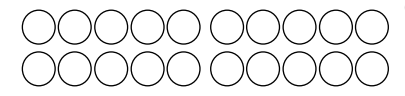


-- -- --

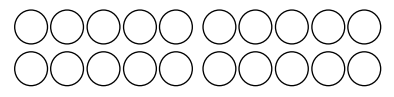
2



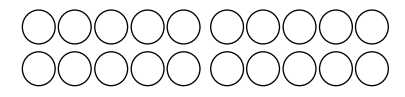
14



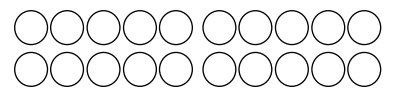
20



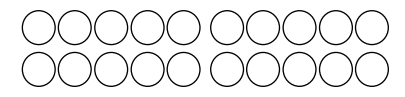
15



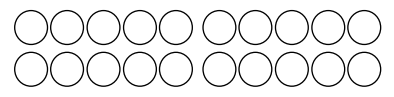
11



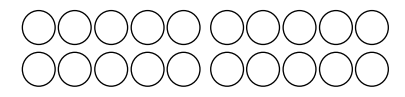
12



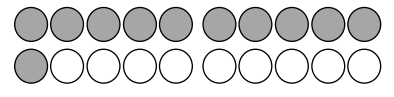
19




16



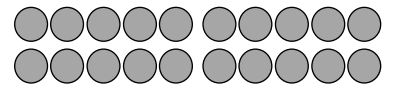
17



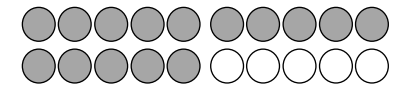
--




--



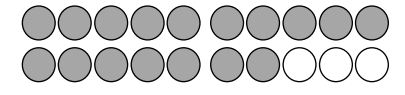
--



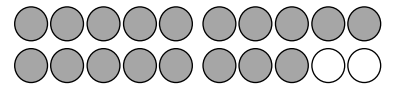
--




--



--

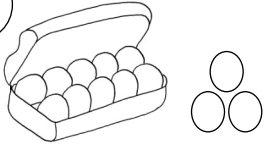


--

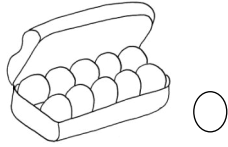


--

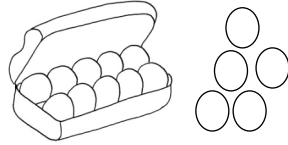
3



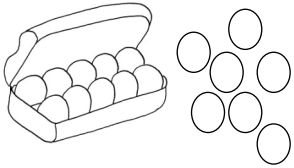
Z	E	
1	3	1 3



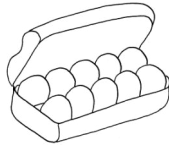
Z	E	



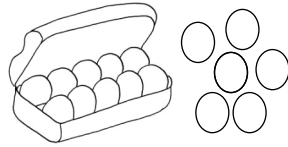
Z	E	



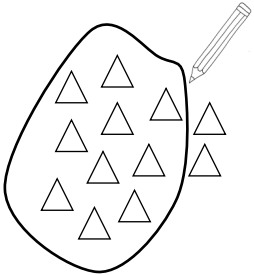
Z	E	




Z	E	




Z	E	




Z	E	




Z	E	




Z	E	



Z	E	



Z	E	



Z	E	

4

$10 + 4 = 14$

Z	E
1	4

$1 \quad 4$

vierzehn

$10 + 7 = \underline{\quad}$

Z	E

$10 + 1 = \underline{\quad}$

Z	E

$10 + 8 = \underline{\quad}$

Z	E

$10 + 6 = \underline{\quad}$

Z	E

$10 + 2 = \underline{\quad}$

Z	E

$10 + 5 = \underline{\quad}$

Z	E

$10 + 3 = \underline{\quad}$

Z	E



$10 + 10 = \underline{\quad}$

Z	E
